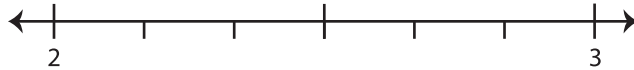


## Rounding Mixed Number: Number Line

Round each mixed number to the nearest half using number line.

1)  $2\frac{1}{6}$

- i) Label  $2\frac{1}{6}$  on the number line.

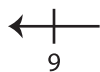


- ii) Which is closer to  $2\frac{1}{6}$ ? a) 2      b)  $2\frac{1}{2}$       c) 3

iii)  $2\frac{1}{6}$  rounded to the nearest half is \_\_\_\_\_

2)  $9\frac{9}{10}$

- i) Label  $9\frac{9}{10}$  on the number line.

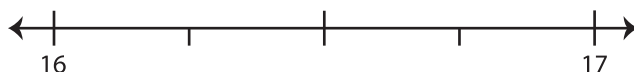


- ii) Which is closer to  $9\frac{9}{10}$ ? a) 9      b)  $9\frac{1}{2}$       c) 10

iii)  $9\frac{9}{10}$  rounded to the nearest half is \_\_\_\_\_

3)  $16\frac{1}{4}$

- i) Label  $16\frac{1}{4}$  on the number line.



- ii) Which is closer to  $16\frac{1}{4}$ ? a) 16      b) 17      c)  $16\frac{1}{2}$

iii)  $16\frac{1}{4}$  rounded to the nearest half is \_\_\_\_\_

# PREVIEW

Gain complete access to the largest  
collection of worksheets in all subjects!

Members, please  
log in to  
download this  
worksheet.

Not a member?  
Please sign up to  
gain complete  
access.

www.mathworksheets4kids.com