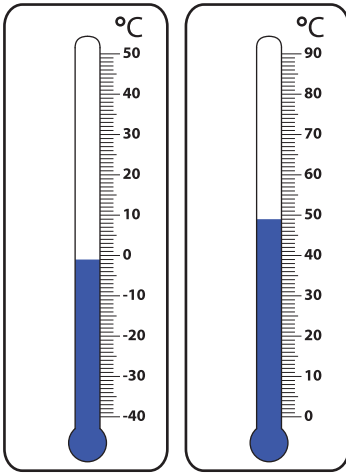


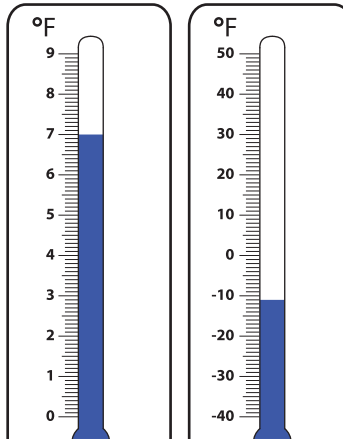
Comparing Temperatures

A) Compare each pair of thermometers, and check the one that is colder.

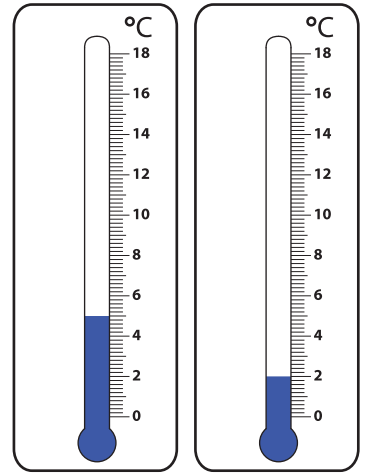
1)


☐
☐

2)

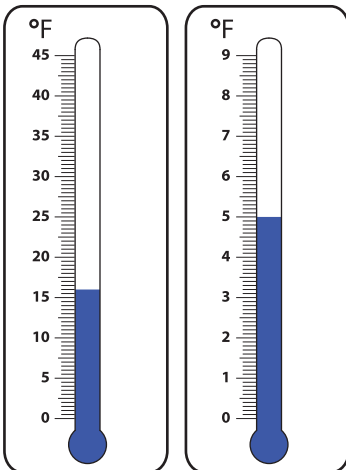


3)

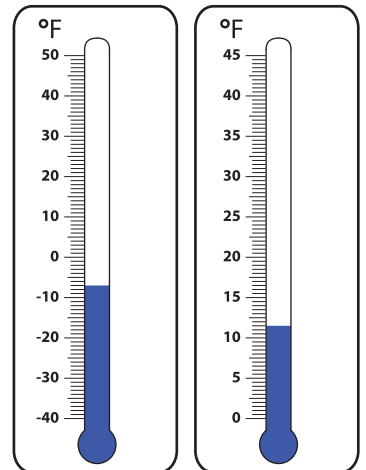

☐
☐

B) Compare each pair

1)

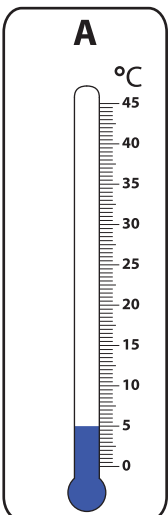

☐
☐

2)

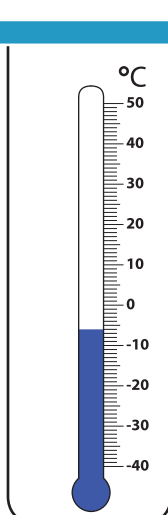
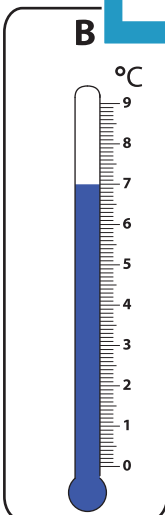

☐
☐

C) Compare the thermometers

A



B



1) Which thermometer indicates the warmest temperature?

2) Which thermometer indicates the coldest temperature?

PREVIEW

Gain complete access to the largest collection of worksheets in all subjects!

Members, please log in to download this worksheet.

Not a member? Please sign up to gain complete access.

www.mathworksheets4kids.com