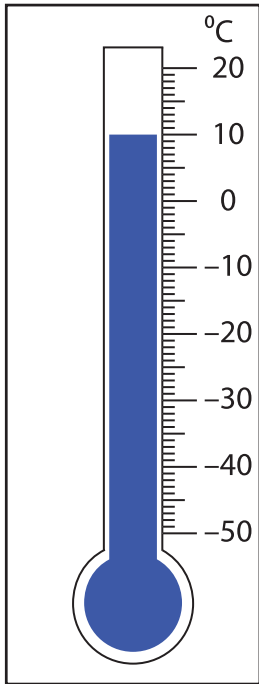


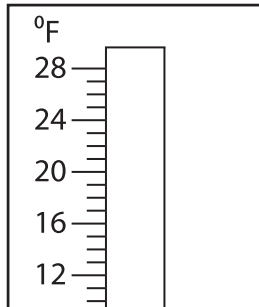
# Adding & Subtracting Temperatures

Find the new reading if the temperature

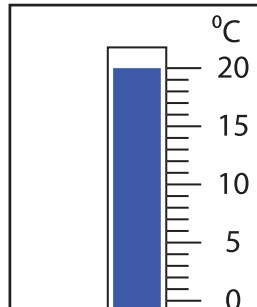
1) falls by  $55^{\circ}\text{C}$ .



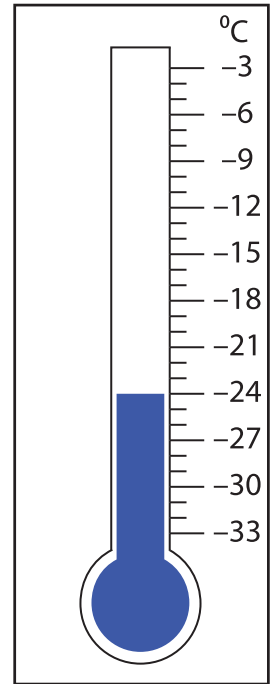
2) rises by  $7^{\circ}\text{F}$ .



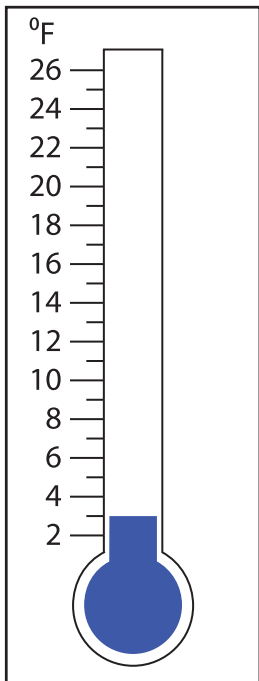
3) falls by  $5^{\circ}\text{C}$ .



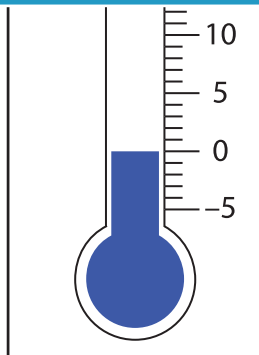
4) rises by  $12^{\circ}\text{C}$ .



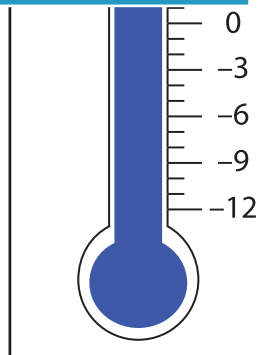
5) rises by  $23^{\circ}\text{F}$ .



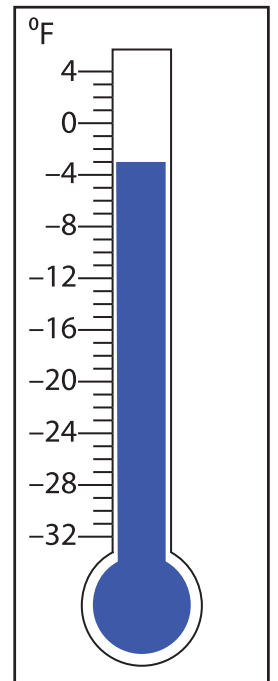
6)



7)



8) falls by  $24^{\circ}\text{F}$ .



**PREVIEW**

Gain complete access to the largest collection of worksheets in all subjects!

Members, please log in to download this worksheet.

Not a member? Please sign up to gain complete access.

[www.mathworksheets4kids.com](http://www.mathworksheets4kids.com)