


Weight Calculation - Metric Units

Calculate the weight.

1)



=



Weight of each  = _____ g

2)



=




Weight of each  = _____ g

3)

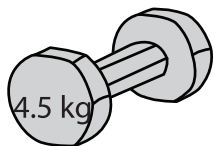


=




ch  = _____ g

4)



=




ch  = _____ kg

5)




=




ch  = _____ g

6)



=

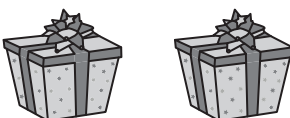


Weight of each  = _____ g

7)



=



Weight of each  = _____ g

PREVIEW

Gain complete access to the largest collection of worksheets in all subjects!

Members, please log in to download this worksheet.

Not a member? Please sign up to gain complete access.

www.mathworksheets4kids.com