


Weight Calculation - Metric Units

Calculate the weight.

1)



Weight of each  = _____ kg


2)



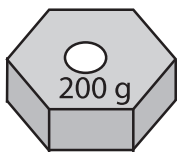
Weight of each  = _____ g


3)



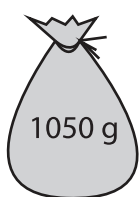
ch  = _____ g


4)



ch  = _____ g

5)




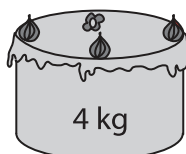
ch  = _____ g

6)



Weight of each  = _____ g

7)



Weight of each  = _____ g

PREVIEW

Gain complete access to the largest collection of worksheets in all subjects!

Members, please log in to download this worksheet.

Not a member? Please sign up to gain complete access.

www.mathworksheets4kids.com