



**Weight Calculation - Metric Units**

Calculate the weight.



1)  Weight of each  = \_\_\_\_\_ g



2)  Weight of each  = \_\_\_\_\_ g

3)  Weight of each  = \_\_\_\_\_ kg

4)  Weight of each  = \_\_\_\_\_ g

5)  Weight of each  = \_\_\_\_\_ g

6)  Weight of each  = \_\_\_\_\_ g

7)  Weight of each  = \_\_\_\_\_ g

**PREVIEW**

Gain complete access to the largest collection of worksheets in all subjects!

Members, please log in to download this worksheet.

Not a member? Please sign up to gain complete access.

[www.mathworksheets4kids.com](http://www.mathworksheets4kids.com)