
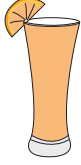


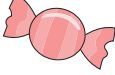





Making Change

Calculate the change for each set of items you buy.

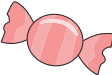

					
\$1.75	\$2.23	\$5.64	\$6.80	\$0.40	\$3.85

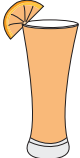

1) 2  + 4 

2)  + 5

3) 7  + 3

4) 8  +

5) 9  + 6 

6)  + 

PREVIEW

Gain complete access to the largest collection of worksheets in all subjects!

Members, please log in to download this worksheet.

Not a member? Please sign up to gain complete access.

www.mathworksheets4kids.com

