





# Saving Money

Find the total amount in each piggy bank and answer the questions.



## PREVIEW

Gain complete access to the largest  
collection of worksheets in all subjects!

Members, please  
log in to  
download this  
worksheet.

Not a member?  
Please sign up to  
gain complete  
access.

[www.mathworksheets4kids.com](http://www.mathworksheets4kids.com)

- 1) Of all the kids, who has saved the most money? \_\_\_\_\_
- 2) Who has saved the same amount as Maria? \_\_\_\_\_
- 3) Who has saved more, Williams or James? \_\_\_\_\_
- 4) Who has the least amount of money in their piggy banks? \_\_\_\_\_
- 5) Arrange the amounts saved in the piggy banks from the least to the greatest.  
\_\_\_\_\_