

Name : _____

Rounding: Cost of the Items

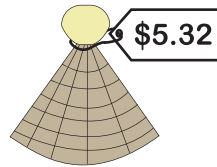
Sheet 3

Round the cost of each item to the nearest dollar.

1)



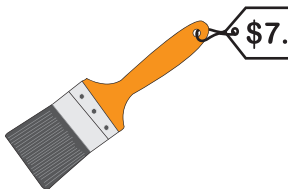
2)



3)



4)



5)



Round the cost of each item to the nearest dollar.

1)



3)



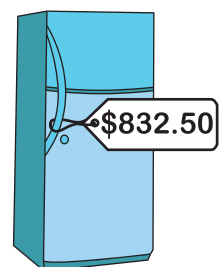
4)



5)



6)



PREVIEW

Gain complete access to the largest collection of worksheets in all subjects!

Members, please log in to download this worksheet.

Not a member? Please sign up to gain complete access.

www.mathworksheets4kids.com