



# Saving Money

Find the total amount in each piggy bank and answer the questions.




# PREVIEW

Gain complete access to the largest collection of worksheets in all subjects!

Members, please log in to download this worksheet.

Not a member? Please sign up to gain complete access.

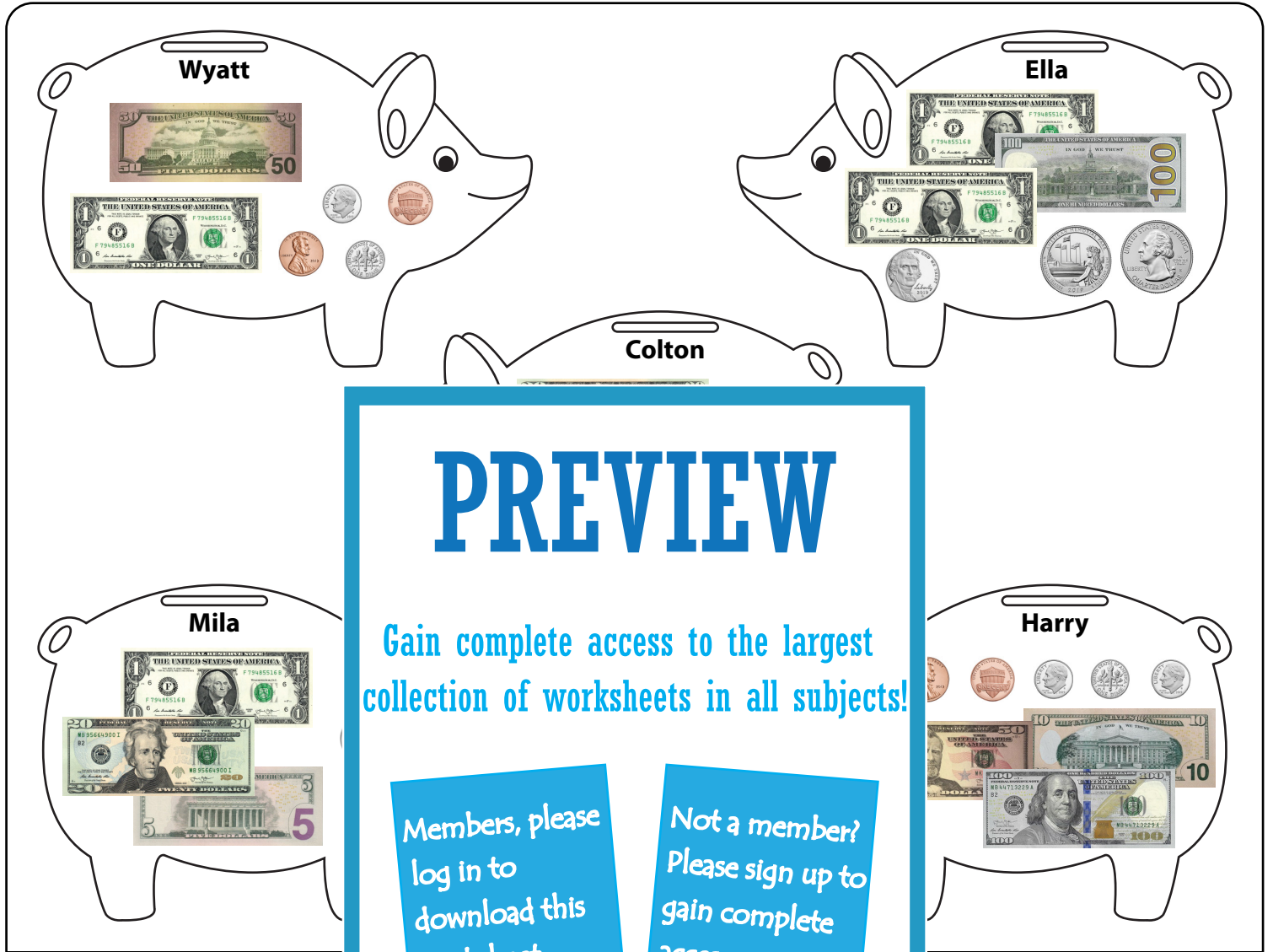
[www.mathworksheets4kids.com](http://www.mathworksheets4kids.com)



- 1) Whose piggy bank has the most money? \_\_\_\_\_
- 2) What is the total savings in all piggy banks? \_\_\_\_\_
- 3) If Colton gives all the coins from his piggy bank to his brother, how much will he have? \_\_\_\_\_
- 4) If Wyatt puts a nickel coin in his piggy bank, what will his savings be? \_\_\_\_\_
- 5) How much money has Harry saved in his piggy bank? \_\_\_\_\_

**Saving Money**

Find the total amount in each piggy bank and answer the questions.



**PREVIEW**

Gain complete access to the largest collection of worksheets in all subjects!

Members, please log in to download this worksheet.

Not a member? Please sign up to gain complete access.

[www.mathworksheets4kids.com](http://www.mathworksheets4kids.com)

1) Whose piggy bank has the most money?

**Mila**

---

2) What is the total savings in Ella's piggy bank?

**\$262.87**

---

3) If Colton gives all the coins from his piggy bank to his brother, how much money will he have?

**\$30.00**

---

4) If Wyatt puts a nickel coin in his piggy bank, what will his savings be?

**\$51.27**

---

5) How much money has Harry saved in his piggy bank?

**\$160.32**

---