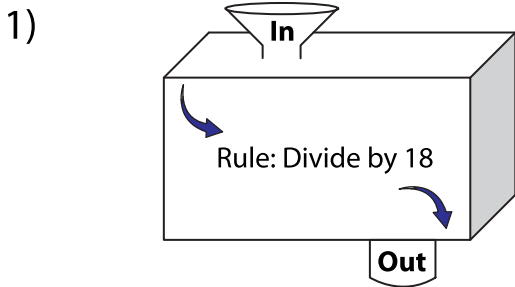


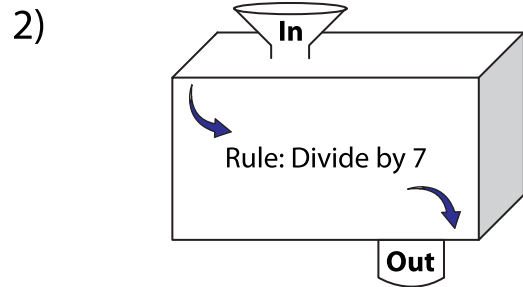
Name : _____

In and Out Boxes

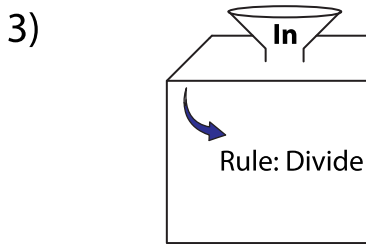
A) Complete the in and out boxes using the given rule.



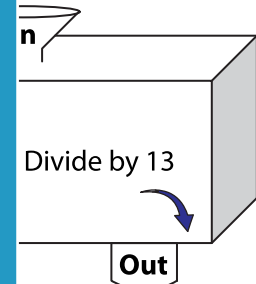
In	126		
Out			



	7	525	861



In	306
Out	



624	832

PREVIEW

Gain complete access to the largest collection of worksheets in all subjects!

Members, please log in to download this worksheet.

Not a member? Please sign up to gain complete access.

www.mathworksheets4kids.com

B) Write the rule.

