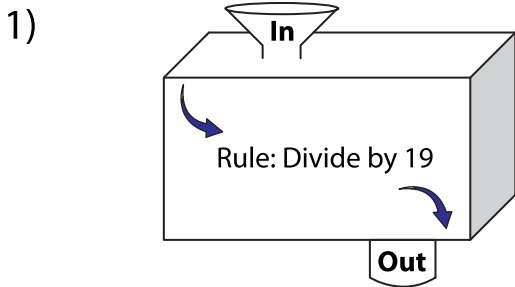
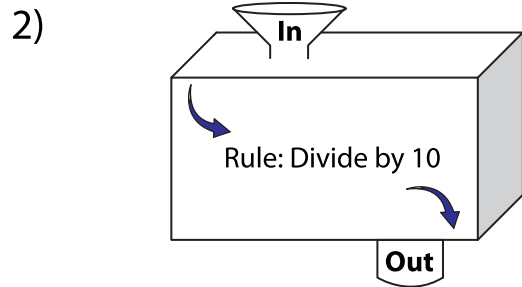


In and Out Boxes

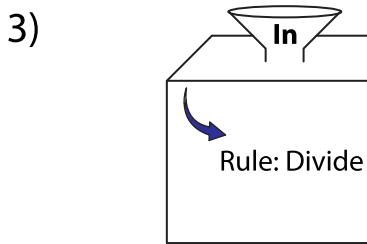
A) Complete the in and out boxes using the given rule.



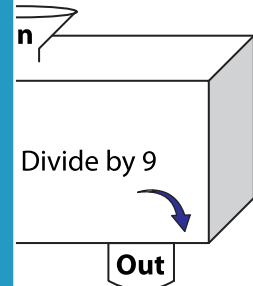
In	285		
Out			



	70	680	790



In		
Out	9	



7		972
	99	

PREVIEW

Gain complete access to the largest collection of worksheets in all subjects!

Members, please log in to download this worksheet.

Not a member? Please sign up to gain complete access.

www.mathworksheets4kids.com

B) Write the rule.

