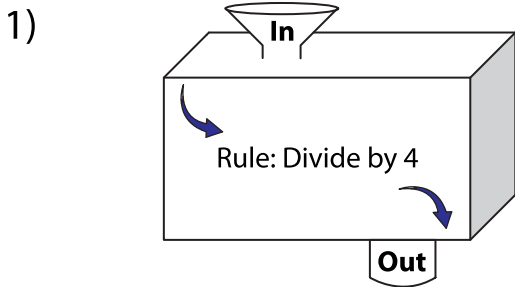
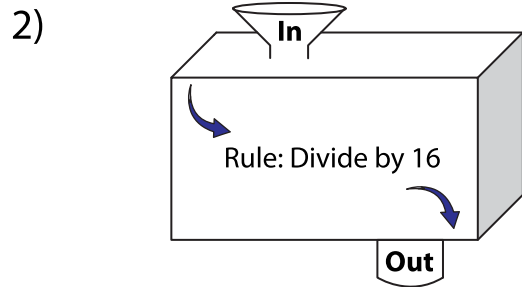


# In and Out Boxes

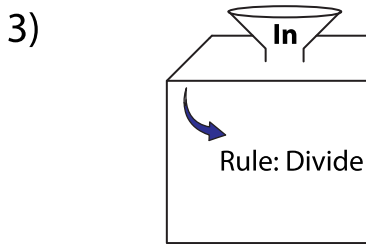
A) Complete the in and out boxes using the given rule.



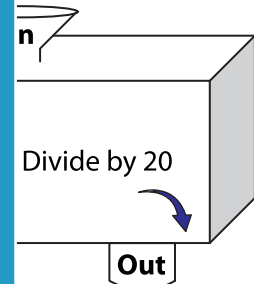
<b>In</b>	340		
<b>Out</b>			



	4	416	960



<b>In</b>		
<b>Out</b>	25	



		520
2	19	

## PREVIEW

Gain complete access to the largest collection of worksheets in all subjects!

Members, please log in to download this worksheet.

Not a member? Please sign up to gain complete access.

[www.mathworksheets4kids.com](http://www.mathworksheets4kids.com)

B) Write the rule.

