


Lattice Multiplication

4-digit by 3-digit: S1

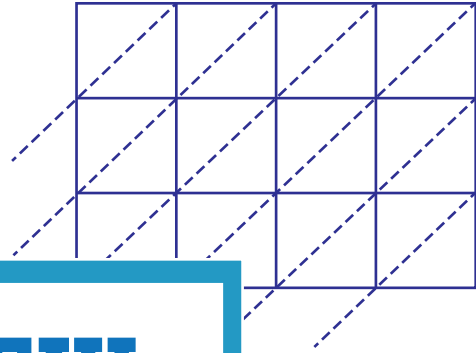
Use lattice multiplication method to find the product in each problem.

1) 9346×252



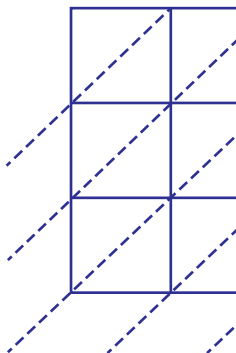
$9346 \times 252 =$ _____

2) 4598×710



$=$ _____

3) 1657×635



$1657 \times 635 =$ _____

PREVIEW

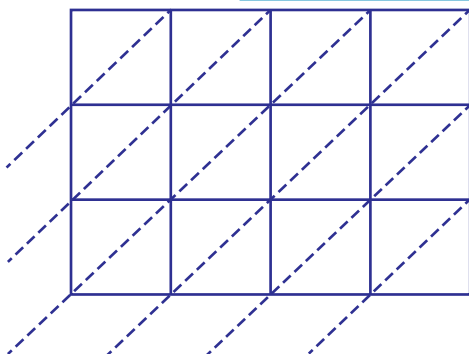
Gain complete access to the largest
collection of worksheets in all subjects!

Members, please
log in to
download this
worksheet.

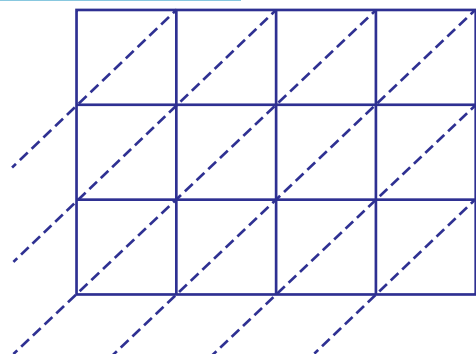
Not a member?
Please sign up to
gain complete
access.

www.mathworksheets4kids.com

5) 8419×948



$8419 \times 948 =$ _____



$7450 \times 381 =$ _____