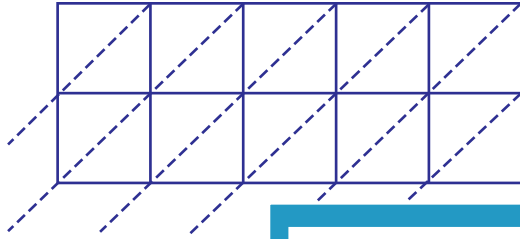


Lattice Multiplication

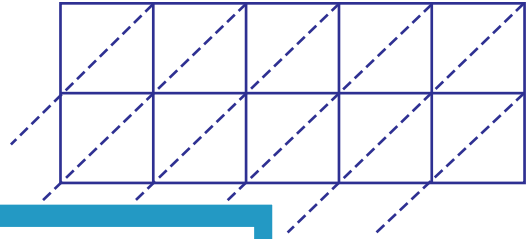
5-digit by 2-digit: S1

Use lattice multiplication method to find the product in each problem.

1) 12987×94



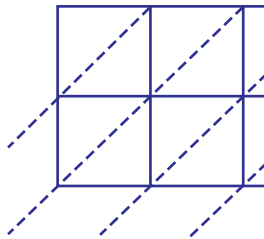
2) 98743×23



$12987 \times 94 =$ _____

PREVIEW

3) 65412×44



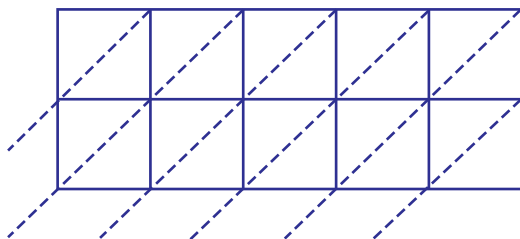
Gain complete access to the largest
collection of worksheets in all subjects!

Members, please
log in to
download this
worksheet.

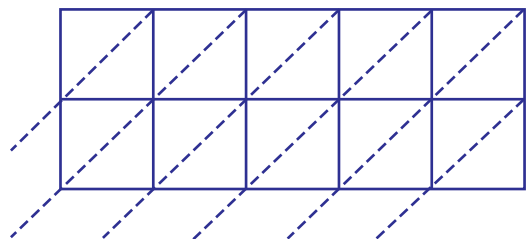
Not a member?
Please sign up to
gain complete
access.

$65412 \times 44 =$ _____

5) 76139×50



$76139 \times 50 =$ _____



$26570 \times 19 =$ _____