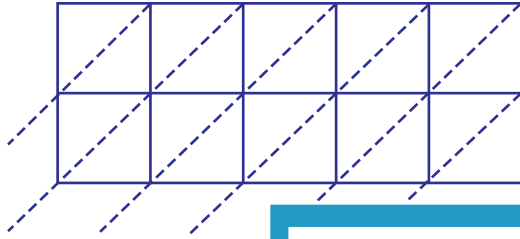


Lattice Multiplication

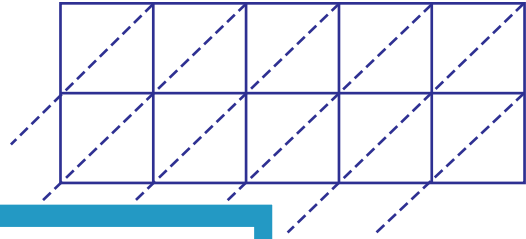
5-digit by 2-digit: S3

Use lattice multiplication method to find the product in each problem.

1) 46571×65



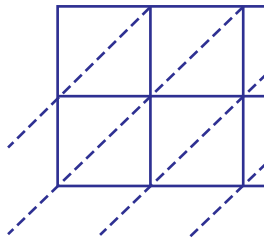
2) 84156×10



$46571 \times 65 =$ _____

PREVIEW

3) 95482×73



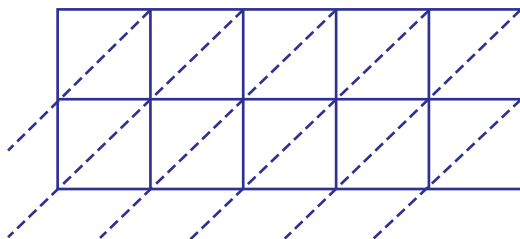
Gain complete access to the largest
collection of worksheets in all subjects!

Members, please
log in to
download this
worksheet.

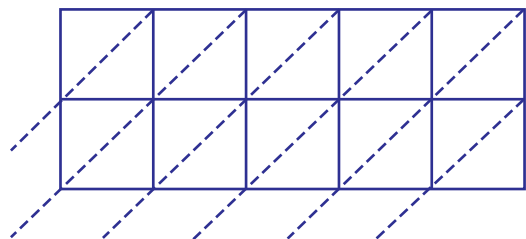
Not a member?
Please sign up to
gain complete
access.

$95482 \times 73 =$ _____

5) 51240×91



$51240 \times 91 =$ _____



$65234 \times 26 =$ _____