


Name : _____

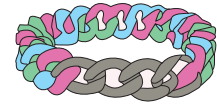
Division

3-digit by 2-digit: S2

- 1) A beverage manufacturing company produces apple cider that is packed into 10-ounce bottles. How many bottles will be required to pack 880 ounces of apple cider?



- 2) Sharon buys a total of 540 color rubber bands to make bracelets for her friends. If it takes 60 bands to make one bracelet, how many bracelets can Sharon be able to make in all?




- 3) A community dog park has 15 cages in a row, how many dogs can be housed there?

there are 15 cages in a row, how many dogs can be housed there?



- 4) Ms. Dawson distributed 120 worksheets to her class. If each student received 8 worksheets, how many students are in her class?

Ms. Dawson distributed 120 worksheets to her class. If each student received 8 worksheets, how many students are in her class?



- 5) If Flynn spent a total of \$960 on his health insurance in 2016, calculate the monthly premium he paid for the year.

