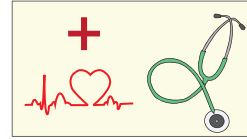


Name : _____

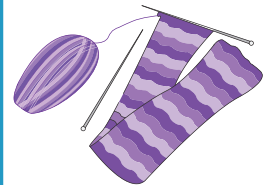
Division

3-digit by 2-digit: S3

- 1) In 2015, Madeline was scheduled to visit the doctor for a routine check up on the 1st of every month. If she spent a total of \$300 towards doctor's fee that year, how much was she charged for each visit?



- 2) Chloe, a tailor is given 112 yards of fabric to make a total of 28 capes for a school Halloween event. How much fabric does she need to make one cape?



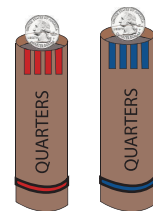
- 3) Erica has quartered a stack of 100 coin wrappers. How many coin wrappers does she have left?

Gain complete access to the largest collection of worksheets in all subjects!

Members, please log in to download this worksheet.

Not a member? Please sign up to gain complete access.

- 4) A concrete mixer truck has 10 drums. If each drum can hold 50 gallons of concrete, how many gallons of concrete can the truck hold?



- 5) The car parking lot at a theater made a total collection of \$979 on Sunday night. If each car owner was charged \$11, how many cars were stationed in the parking lot?

- 6) A concrete mixer truck has 10 drums. If each drum can hold 50 gallons of concrete, how many gallons of concrete can the truck hold?



- 7) The car parking lot at a theater made a total collection of \$979 on Sunday night. If each car owner was charged \$11, how many cars were stationed in the parking lot?