


Name : _____

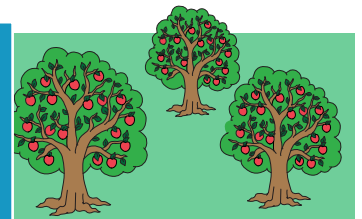
Multiplication

4-digit & 5-digit by 2-digit: S1

- 1) If on average a person blinks 28,800 times a day, how many times will they blink in 30 days?



- 2) The area of an apple orchard measures 52 hectares. If there are 1,568 trees in one hectare, how many apple trees are in the orchard?



PREVIEW

Gain complete access to the largest collection of worksheets in all subjects!

Members, please log in to download this worksheet.

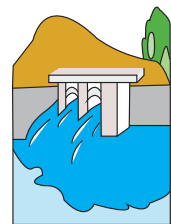
Not a member? Please sign up to gain complete access.

www.mathworksheets4kids.com

- 3) A weir, 10 inches

gallons of water


minute. How many



- 4) A manufacturing

gloves can the c

hour. How many



- 5) The average yield of wheat per acre is 56 bushels. If this quantity is equivalent to 3,360 pounds, how many pounds of wheat will 32 hectares of land produce on average?