

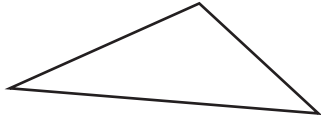
Name : _____

Identifying Triangles

Sides: S1

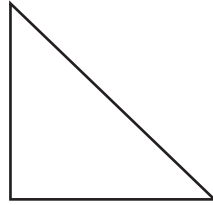
Identify each triangle based on sides. (Equilateral, Isosceles or Scalene)

1)

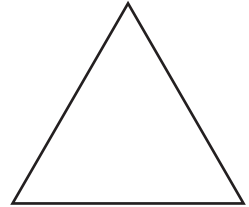


Scalene triangle

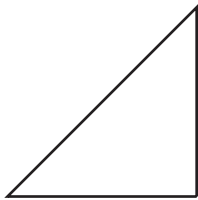
2)




3)



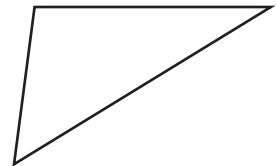
4)



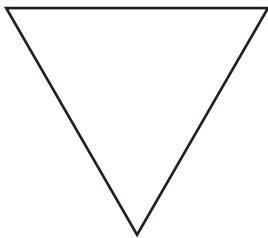
5)



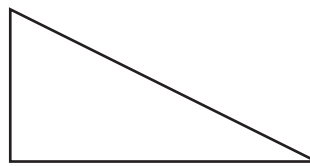
6)



7)



8)



9)



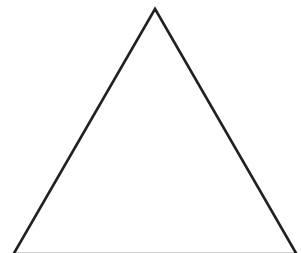
10)



11)



12)



Name : _____

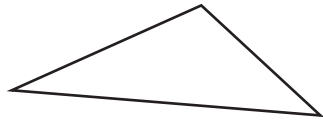
Answer key

Identifying Triangles

Sides: S1

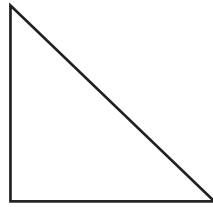
Identify each triangle based on sides. (Equilateral, Isosceles or Scalene)

1)



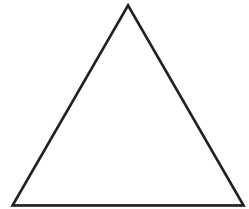
Scalene triangle

2)



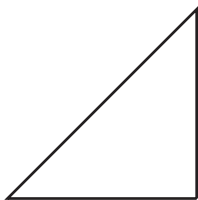
Isosceles triangle

3)




Equilateral triangle

4)



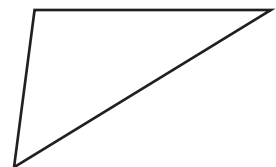
Isosceles triangle

5)



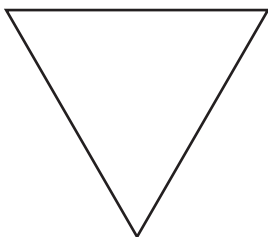
Equilateral triangle

6)



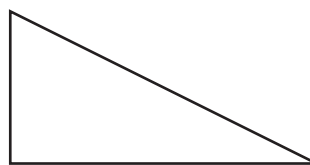
Scalene triangle

7)



Equilateral triangle

8)



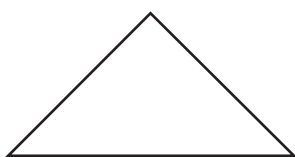
Scalene triangle

9)



Isosceles triangle

10)



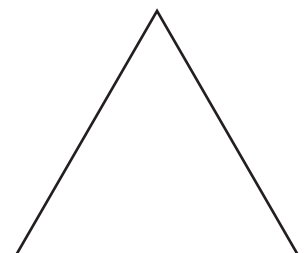
Isosceles triangle

11)



Scalene triangle

12)



Equilateral triangle