

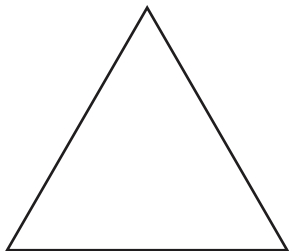
Name : _____

Identifying Triangles

Sides: S3

Identify each triangle based on sides. (Equilateral, Isosceles or Scalene)

1)

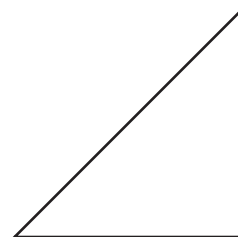


Equilateral triangle

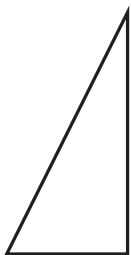
2)



3)



4)



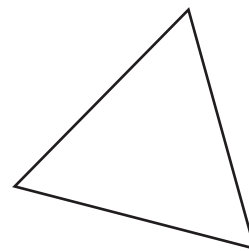
PREVIEW

Gain complete access to the largest collection of worksheets in all subjects!

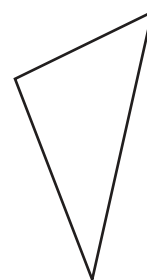
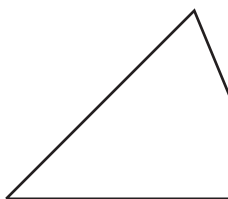
Members, please log in to download this worksheet.

Not a member? Please sign up to gain complete access.

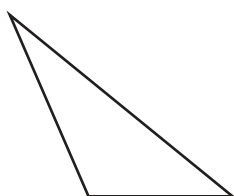
www.mathworksheets4kids.com



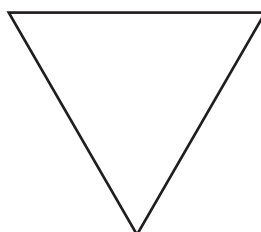
7)



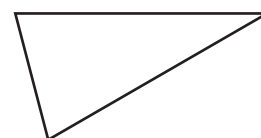
10)



11)



12)



Name : _____

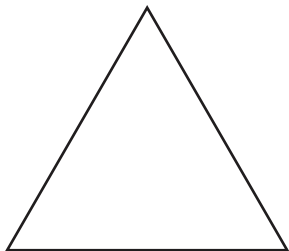
Answer key

Identifying Triangles

Sides: S3

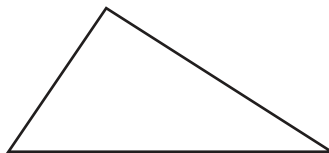
Identify each triangle based on sides. (Equilateral, Isosceles or Scalene)

1)



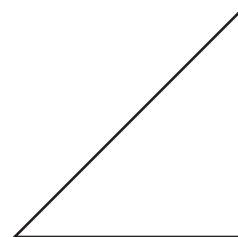
Equilateral triangle

2)



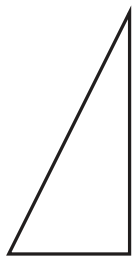
Scalene triangle

3)



Isosceles triangle

4)



Scalene triangle

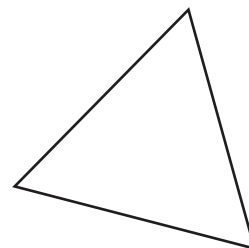
PREVIEW

Gain complete access to the largest collection of worksheets in all subjects!

Members, please log in to download this worksheet.

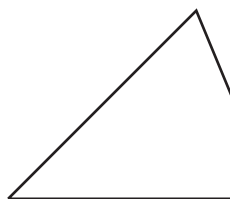
Not a member? Please sign up to gain complete access.

www.mathworksheets4kids.com

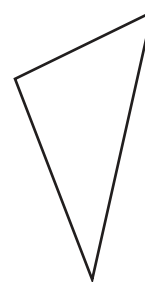


Equilateral triangle

7)

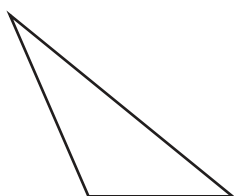


Isosceles triangle



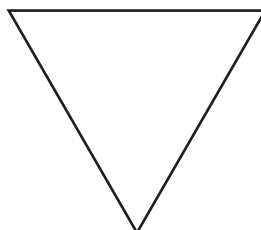
Scalene triangle

10)



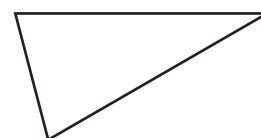
Scalene triangle

11)



Equilateral triangle

12)



Isosceles triangle