

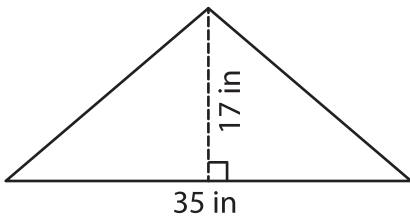
Name : \_\_\_\_\_

## Area – Mixed Shapes

L1S1

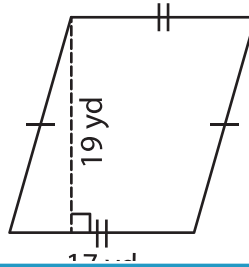
Find the area of each shape.

1)



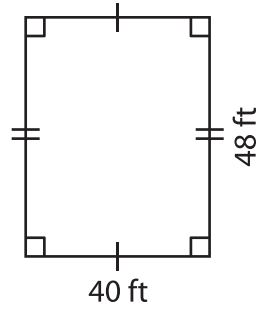
Area = \_\_\_\_\_

2)

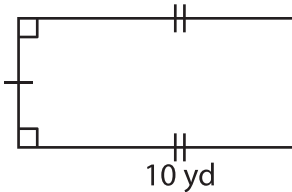


Area = \_\_\_\_\_

3)



4)



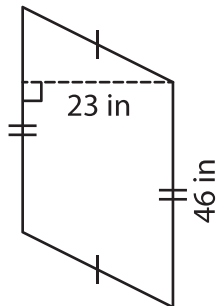
Area = \_\_\_\_\_

Gain complete access to the largest collection of worksheets in all subjects!

Members, please log in to download this worksheet.

Not a member? Please sign up to gain complete access.

[www.mathworksheets4kids.com](http://www.mathworksheets4kids.com)



Area = \_\_\_\_\_

7) The side of a square n

\_\_\_\_\_

8) Find the area of the triangle whose base is 32 inches and height is 16 inches.

\_\_\_\_\_