

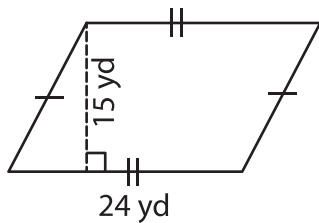
Name : \_\_\_\_\_

## Area – Mixed Shapes

L153

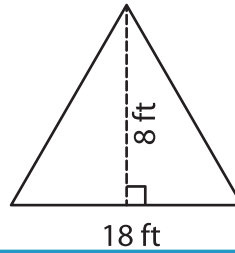
Find the area of each shape.

1)



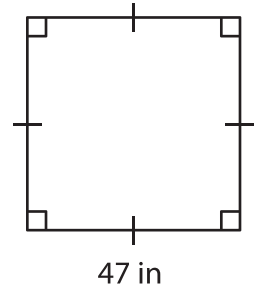
Area = \_\_\_\_\_

2)

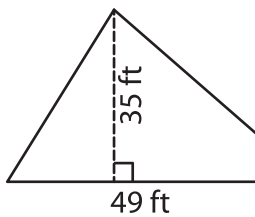


Area = \_\_\_\_\_

3)



4)



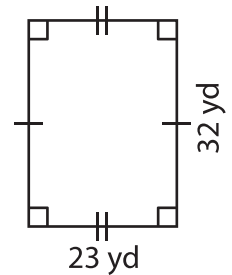
Area = \_\_\_\_\_

**PREVIEW**  
Gain complete access to the largest collection of worksheets in all subjects!

Members, please log in to download this worksheet.

Not a member? Please sign up to gain complete access.

[www.mathworksheets4kids.com](http://www.mathworksheets4kids.com)



Area = \_\_\_\_\_

7) If the side of a square

\_\_\_\_\_

8) The length and width of a rectangle are 45 yards and 34 yards respectively. What is the area of the rectangle?

\_\_\_\_\_