


Name : \_\_\_\_\_

T1S1

## Area of a Rectangle

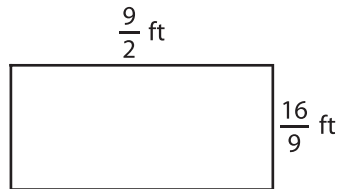
Find the area of each rectangle.

1)



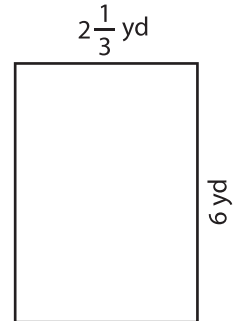
Area =

2)



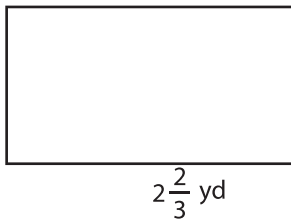
Area =

3)



Area =

4)



Area =

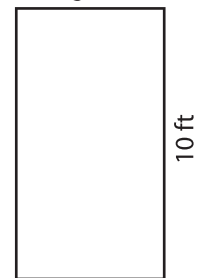
Gain complete access to the largest collection of worksheets in all subjects!

Members, please log in to download this worksheet.

Not a member? Please sign up to gain complete access.

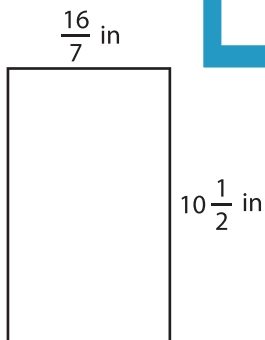
[www.mathworksheets4kids.com](http://www.mathworksheets4kids.com)

$\frac{14}{5}$  ft



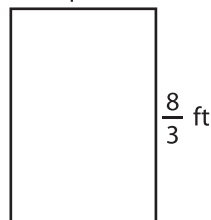
Area =

7)




Area =

4 ft



Area =

$\frac{18}{5}$  yd



Area =