

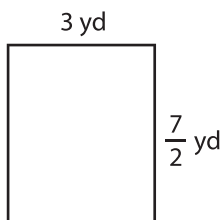
Name : _____

Area of a Rectangle

T1S3

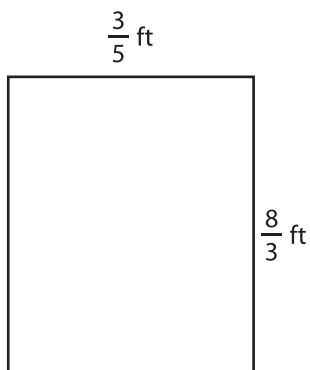
Find the area of each rectangle.

1)



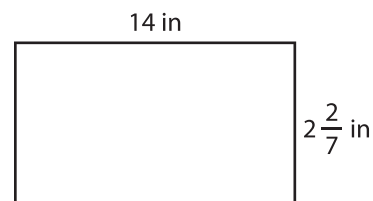
Area =

2)

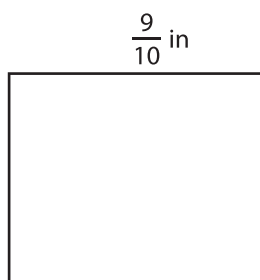


Area =

3)



4)



Area =

PREVIEW
Gain complete access to the largest collection of worksheets in all subjects!

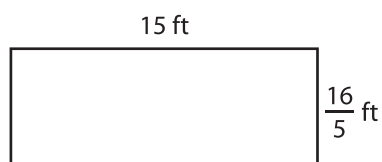
Members, please log in to download this worksheet.

Not a member? Please sign up to gain complete access.

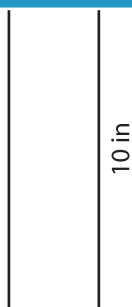
www.mathworksheets4kids.com

Area =

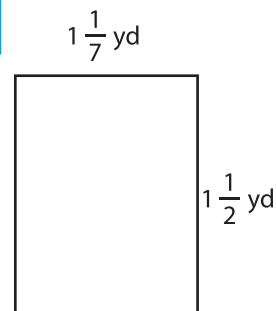
7)



Area =



Area =



Area =