

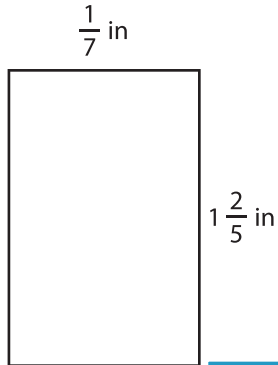
Name : _____

Area of a Rectangle

T1S5

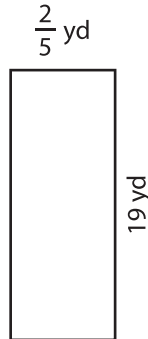
Find the area of each rectangle.

1)

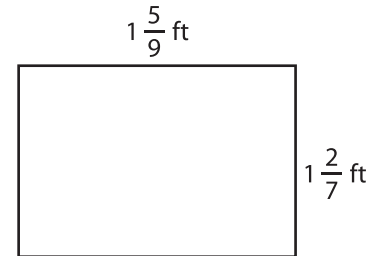


Area =

2)

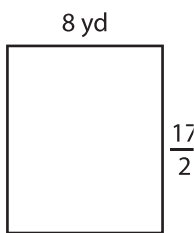


3)



Area =

4)



Area =

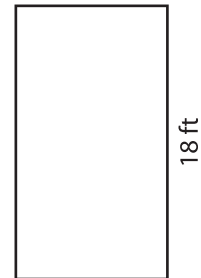
Gain complete access to the largest collection of worksheets in all subjects!

Members, please log in to download this worksheet.

Not a member? Please sign up to gain complete access.


www.mathworksheets4kids.com

$1\frac{1}{9}$ ft



Area =

7)



Area =

$\frac{11}{2}$ in



Area =

$\frac{18}{5}$ yd



Area =