


Name : _____

Perimeter of a Polygon

Find the perimeter of each regular polygon.

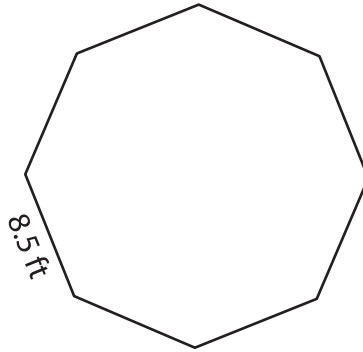
1)



14.8 yd

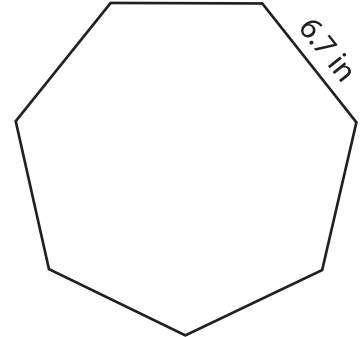
Perimeter =

2)



8.5 ft

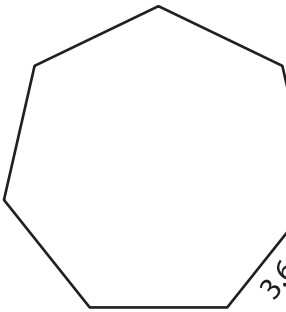
3)



6.7 in

Perimeter =

4)



3.6

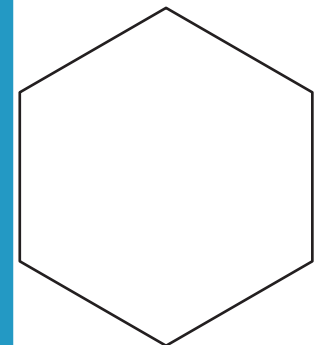
Perimeter =

PREVIEW
Gain complete access to the largest collection of worksheets in all subjects!

Members, please log in to download this worksheet.

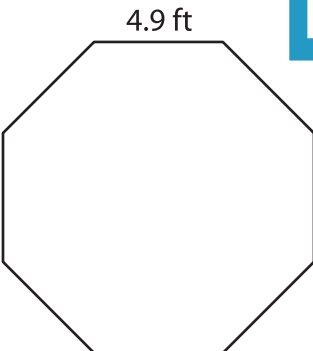
Not a member? Please sign up to gain complete access.

www.mathworksheets4kids.com



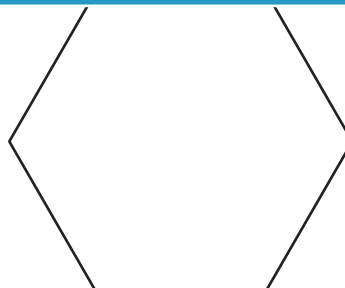
Perimeter =

7)



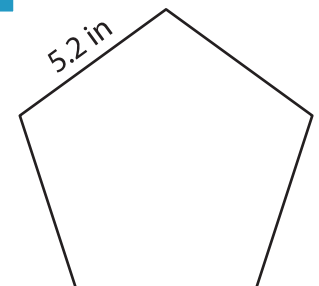
4.9 ft

Perimeter =



2.1 yd

Perimeter =



5.2 in

Perimeter =