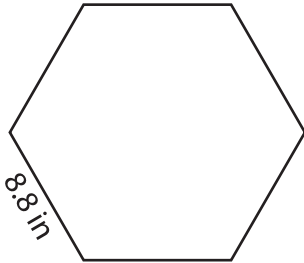


Name : \_\_\_\_\_

## Perimeter of a Polygon

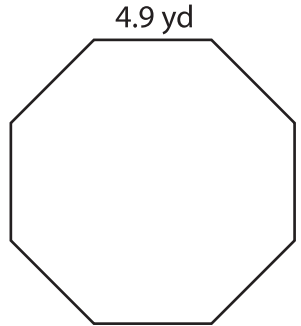
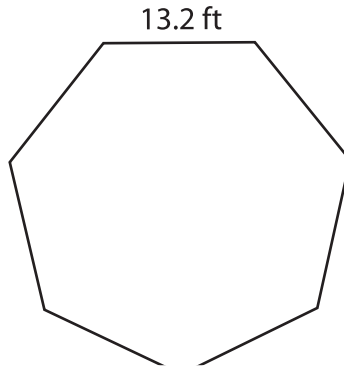
Find the perimeter of each regular polygon.

1)

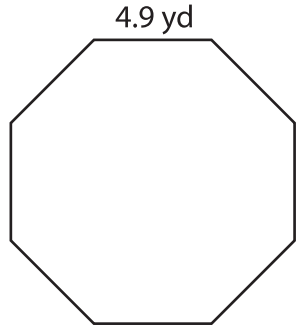


Perimeter =

2)

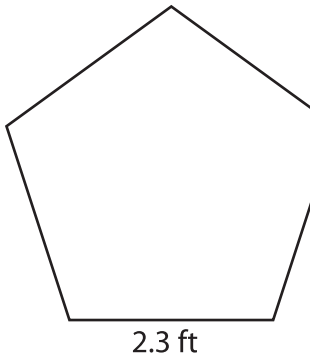


3)



Perimeter =

4)



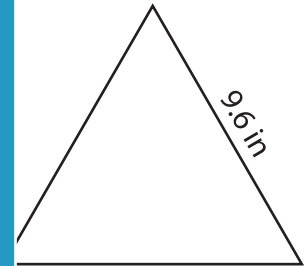
Perimeter =

**PREVIEW**  
Gain complete access to the largest collection of worksheets in all subjects!

Members, please log in to download this worksheet.

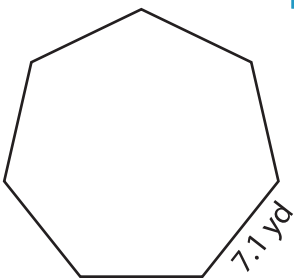
Not a member? Please sign up to gain complete access.

[www.mathworksheets4kids.com](http://www.mathworksheets4kids.com)

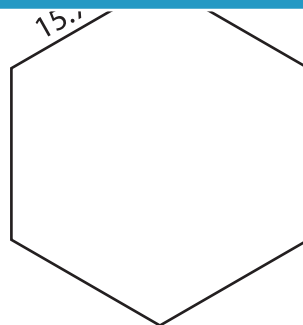


Perimeter =

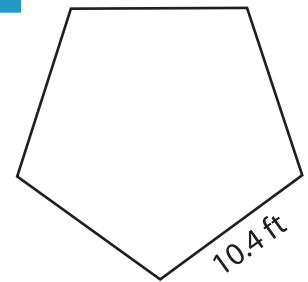
7)



Perimeter =



Perimeter =



Perimeter =