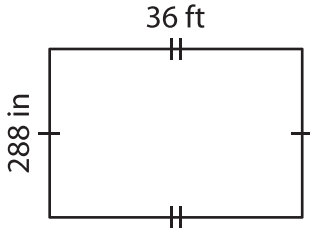


Name : _____

Perimeter of a Quadrilateral

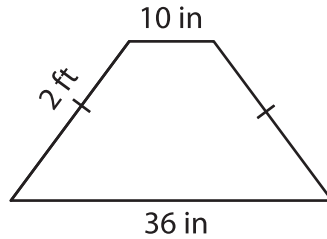
Find the perimeter of each quadrilateral.

1)

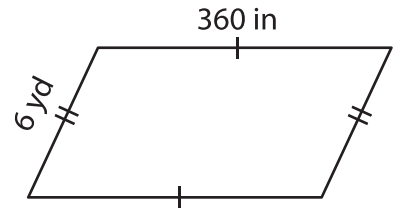


Perimeter = _____ f

2)

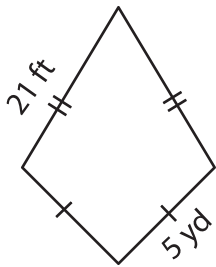


3)



Perimeter = _____ yd

4)



Perimeter = _____ yd

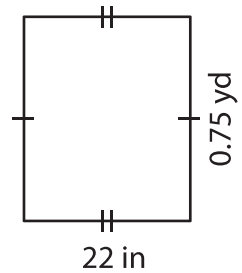
PREVIEW

Gain complete access to the largest collection of worksheets in all subjects!

Members, please log in to download this worksheet.

Not a member? Please sign up to gain complete access.

www.mathworksheets4kids.com



Perimeter = _____ in

7) The parallel bases of an isosceles trapezoid are 10 feet and 20 feet. Each leg measures 10 feet, determine the perimeter.

Perimeter = _____ feet

_____ feet

8) If the sides of a parallelogram measure 14 inches and 0.5 yards. What is the perimeter of the parallelogram?

_____ inches