

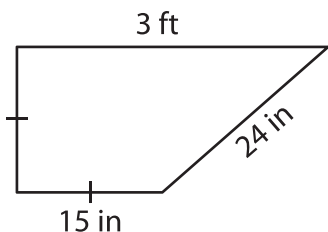
Name : _____

Perimeter of a Quadrilateral

Sheet 3

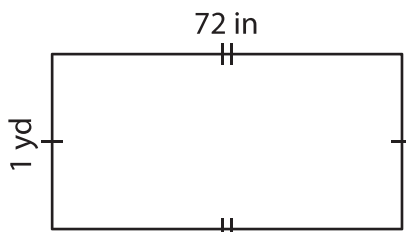
Find the perimeter of each quadrilateral.

1)

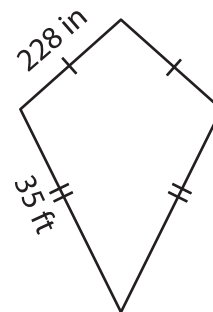


Perimeter = _____ i

2)

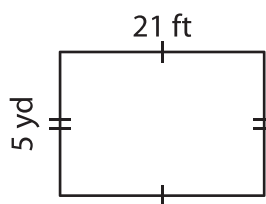


3)



Perimeter = _____ ft

4)



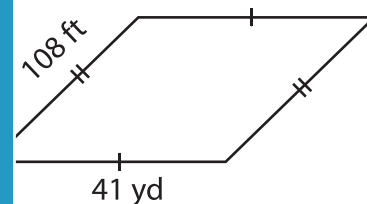
Perimeter = _____ f

Gain complete access to the largest collection of worksheets in all subjects!

Members, please log in to download this worksheet.

Not a member? Please sign up to gain complete access.

www.mathworksheets4kids.com



Perimeter = _____ yd

7) The adjacent sides of a parallelogram.

Determine the perimeter of the

_____ yards

8) In a right trapezoid, the parallel bases measure 26 feet and 19 feet. If the legs measure 19 feet and 4 yards, find the perimeter of the right trapezoid.

_____ feet