

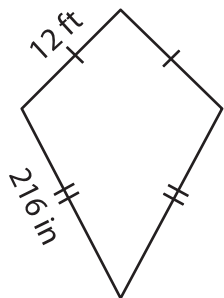
Name : \_\_\_\_\_

## Perimeter of a Quadrilateral

Sheet 4

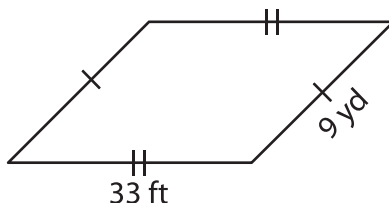
Find the perimeter of each quadrilateral.

1)

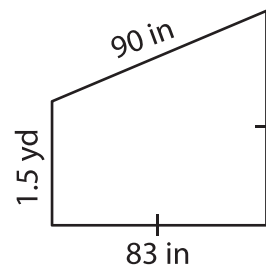


Perimeter = \_\_\_\_\_

2)

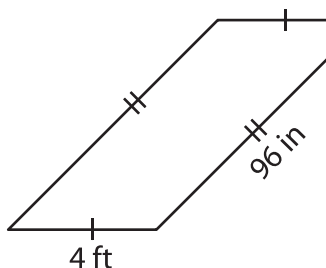


3)



Perimeter = \_\_\_\_\_ in

4)



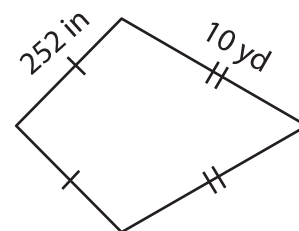
Perimeter = \_\_\_\_\_

**PREVIEW**  
Gain complete access to the largest collection of worksheets in all subjects!

Members, please log in to download this worksheet.

Not a member? Please sign up to gain complete access.

[www.mathworksheets4kids.com](http://www.mathworksheets4kids.com)



Perimeter = \_\_\_\_\_ yd

7) Find the perimeter of the

\_\_\_\_\_ inches

8) What is the perimeter of the rectangle, if the width of a rectangle is 72 feet and the height is 41 yards?

\_\_\_\_\_ yards