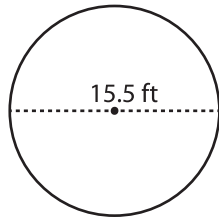


Radius & Diameter

Moderate: S1

Find the radius and diameter of each circle.

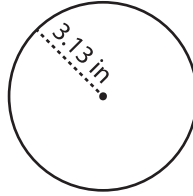
1)



Radius = _____

Diameter = _____

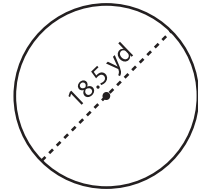
2)



Radius = _____

Diameter = _____

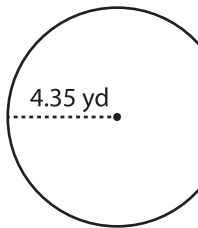
3)



Radius = _____

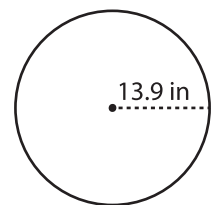
Diameter = _____

4)



Radius = _____

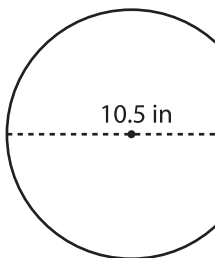
Diameter = _____



Radius = _____

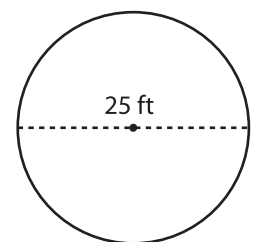
Diameter = _____

7)



Radius = _____

Diameter = _____



Radius = _____

Diameter = _____

PREVIEW

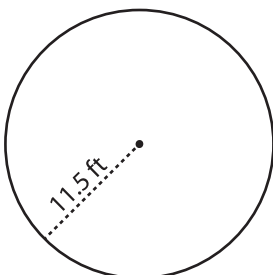
Gain complete access to the largest collection of worksheets in all subjects!

Members, please log in to download this worksheet.

Not a member? Please sign up to gain complete access.

www.mathworksheets4kids.com

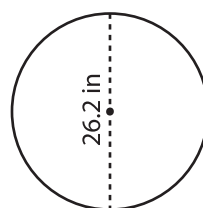
10)



Radius = _____

Diameter = _____

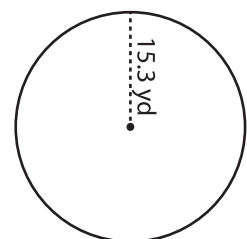
11)



Radius = _____

Diameter = _____

12)



Radius = _____

Diameter = _____