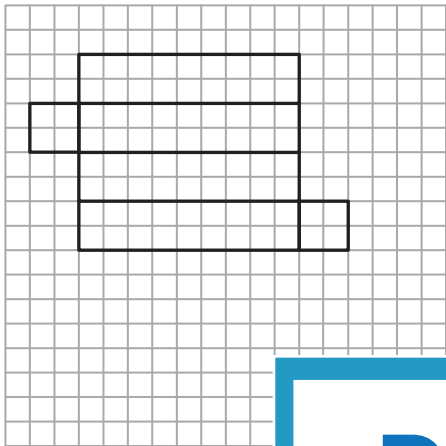


Name : _____

Surface Area of Solids using Nets

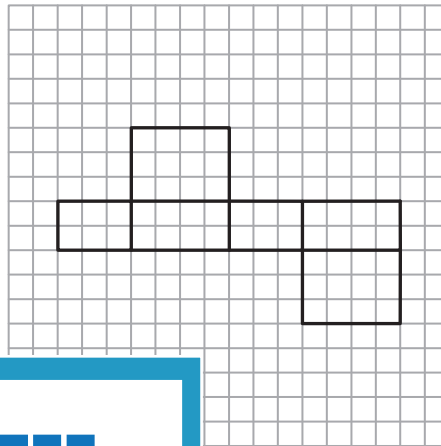
Count the unit squares, and find the surface area of the shape represented by each net. □ = 1 yd²

1) Rectangular Prism



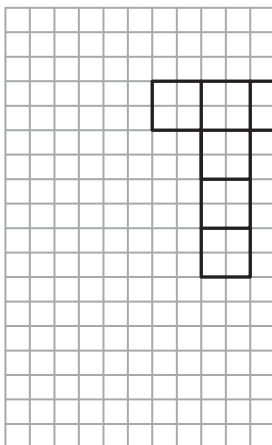
Surface Area = _____

2) Rectangular Prism

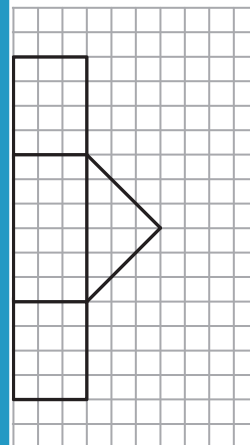


Surface Area = _____

3) Cube

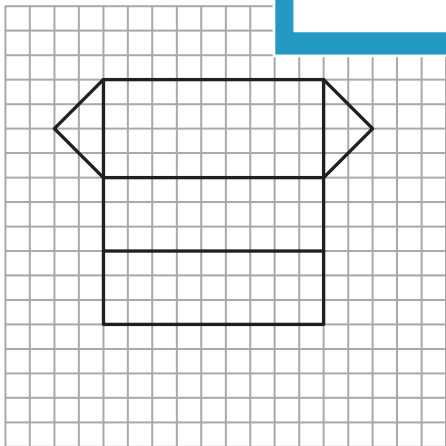


Surface Area = _____

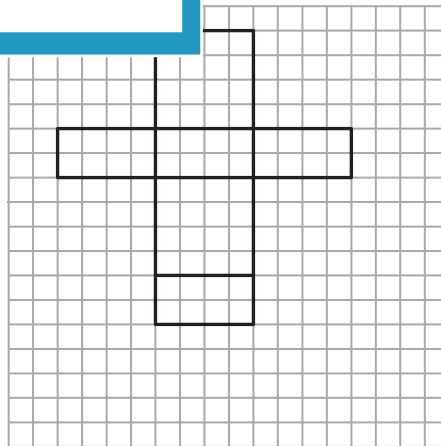


Surface Area = _____

5) Triangular Prism



Surface Area = _____



Surface Area = _____

PREVIEW

Gain complete access to the largest collection of worksheets in all subjects!

Members, please log in to download this worksheet.

Not a member? Please sign up to gain complete access.

www.mathworksheets4kids.com