

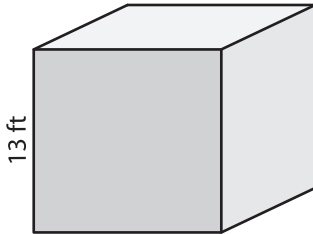
Name : \_\_\_\_\_

## Surface Area - Cube

ES1

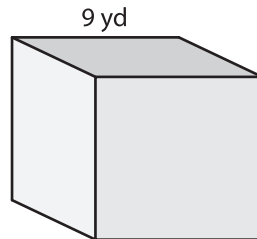
Find the surface area of each cube.

1)



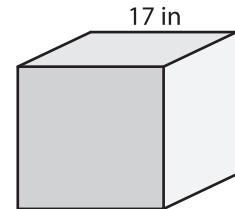
surface area = \_\_\_\_\_

2)

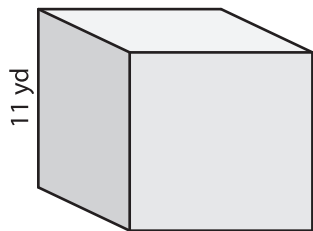


surface area = \_\_\_\_\_

3)



4)



surface area = \_\_\_\_\_

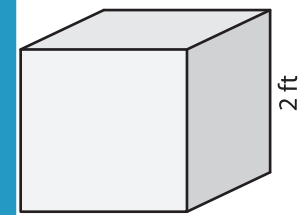
**PREVIEW**

Gain complete access to the largest collection of worksheets in all subjects!

Members, please log in to download this worksheet.

Not a member? Please sign up to gain complete access.

[www.mathworksheets4kids.com](http://www.mathworksheets4kids.com)



surface area = \_\_\_\_\_

7) If the side length of the cube is 5 cm, find the surface area.

\_\_\_\_\_

8) Determine the surface area of the cube whose side length is 3 inches.

\_\_\_\_\_