

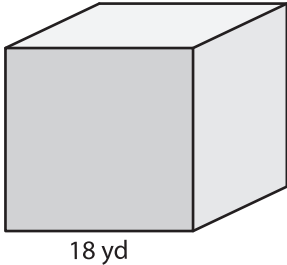
Name : \_\_\_\_\_

## Surface Area - Cube

ES2

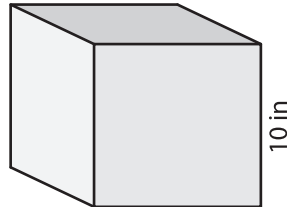
Find the surface area of each cube.

1)



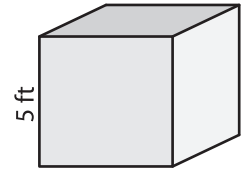
surface area = \_\_\_\_\_

2)



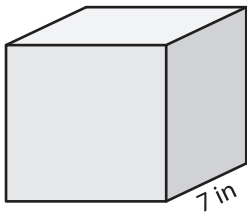
surface area = \_\_\_\_\_

3)



surface area = \_\_\_\_\_

4)



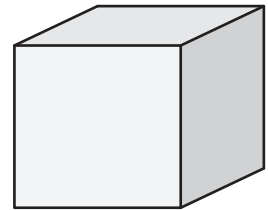
surface area = \_\_\_\_\_

**PREVIEW**  
Gain complete access to the largest  
collection of worksheets in all subjects!

Members, please  
log in to  
download this  
worksheet.

Not a member?  
Please sign up to  
gain complete  
access.

[www.mathworksheets4kids.com](http://www.mathworksheets4kids.com)



surface area = \_\_\_\_\_

7) The side length of a cube is \_\_\_\_\_

\_\_\_\_\_

8) Find the surface area of the cube, if its side length is 16 yards.