

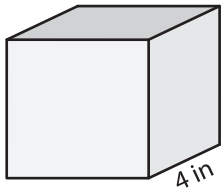
Name : _____

Surface Area - Cube

ES3

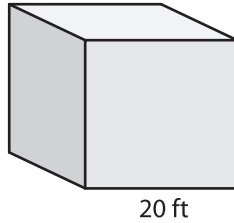
Find the surface area of each cube.

1)

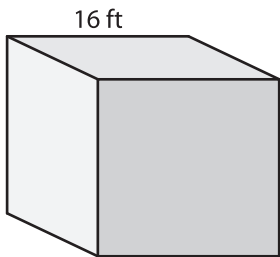


surface area = _____

2)

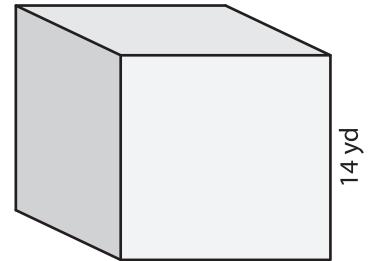


4)



surface area = _____

3)



surface area = _____

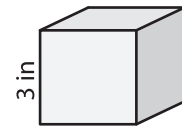
PREVIEW

Gain complete access to the largest
collection of worksheets in all subjects!

Members, please
log in to
download this
worksheet.

Not a member?
Please sign up to
gain complete
access.

www.mathworksheets4kids.com



surface area = _____

7) Find the surface area of

8) If the side length of the cube is 15 feet, determine the surface area.