

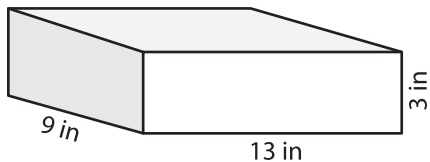
Name : \_\_\_\_\_

Integers: ES1

## Surface Area - Rectangular Prism

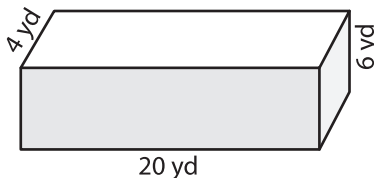
Find the surface area of each rectangular prism.

1)



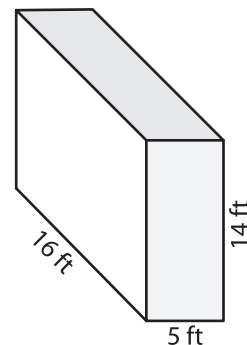
Surface Area = \_\_\_\_\_

2)



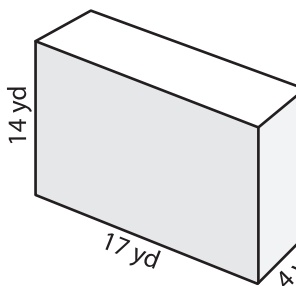
Surface Area = \_\_\_\_\_

3)

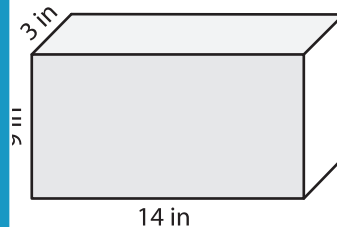


Surface Area = \_\_\_\_\_

4)

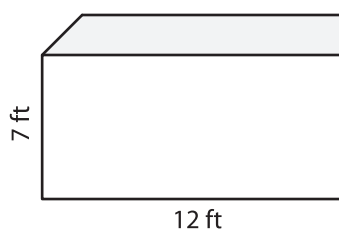


Surface Area = \_\_\_\_\_

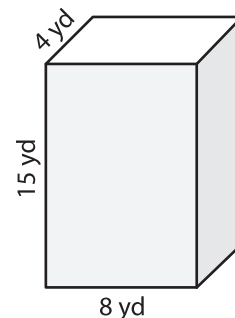


Surface Area = \_\_\_\_\_

7)



Surface Area = \_\_\_\_\_



Surface Area = \_\_\_\_\_

- 10) A rectangular-shaped box has the following dimensions: 12 yards, 8 yards, and 18 yards. What is the surface area of the box?

Surface Area = \_\_\_\_\_

# PREVIEW

Gain complete access to the largest collection of worksheets in all subjects!

Members, please log in to download this worksheet.

Not a member? Please sign up to gain complete access.

[www.mathworksheets4kids.com](http://www.mathworksheets4kids.com)