

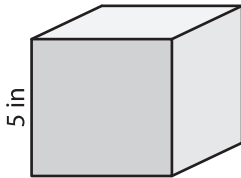
Name : _____

Volume - Cube

ES1

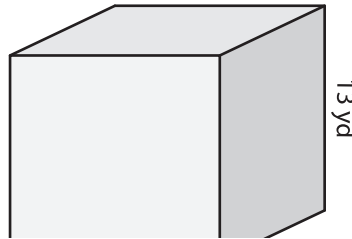
A) Find the volume of each cube.

1)



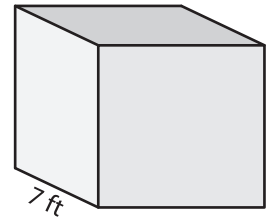
Volume = _____

2)



Volume = _____

3)



B) Find the volume of each cube.

4) side length = 8 ft

Volume = _____

6) side length = 11 in

Volume = _____

PREVIEW

Gain complete access to the largest
collection of worksheets in all subjects!

Members, please
log in to
download this
worksheet.

Not a member?
Please sign up to
gain complete
access.

www.mathworksheets4kids.com

Volume = _____

8) The length of each side of a cubical wooden block is 16 inches. What is the volume of the block?
