

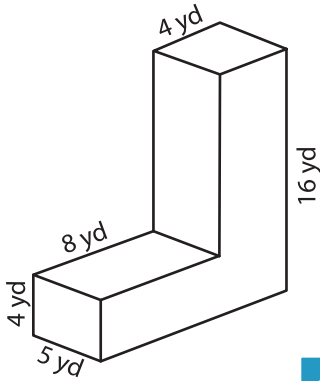
Name : _____

Integers: ES2

Surface Area - Solid Figures

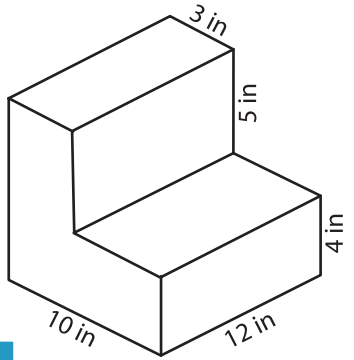
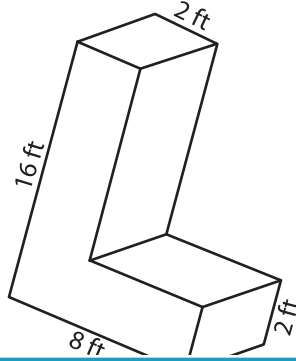
Find the surface area of each solid figure.

1)



Surface Area = _____

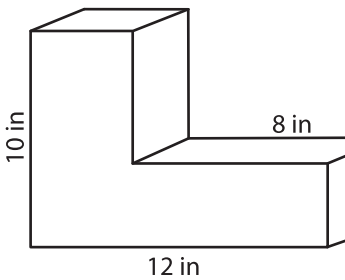
2)



3)

face Area = _____

4)



Surface Area = _____

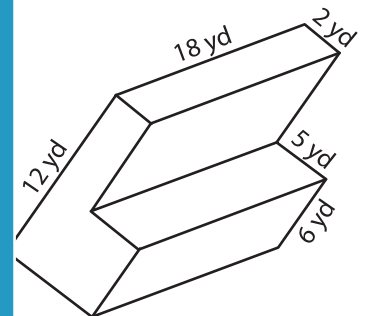
PREVIEW

Gain complete access to the largest collection of worksheets in all subjects!

Members, please log in to download this worksheet.

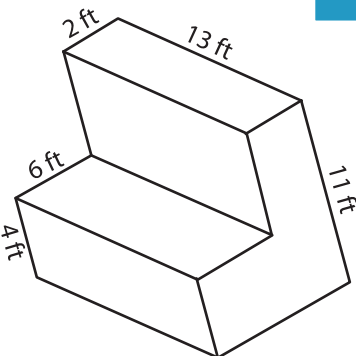
Not a member? Please sign up to gain complete access.

www.mathworksheets4kids.com

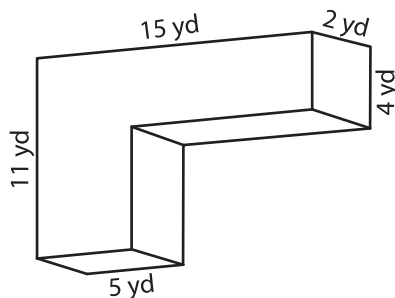


face Area = _____

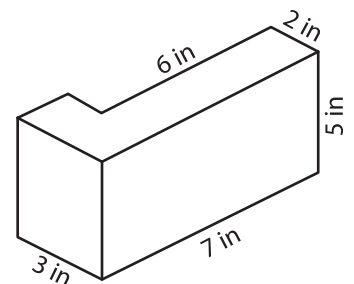
7)



Surface Area = _____



Surface Area = _____



Surface Area = _____