

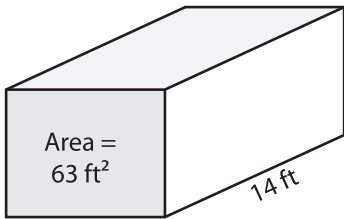
Name : _____

Volume - Rectangular Prism

Integers: S1

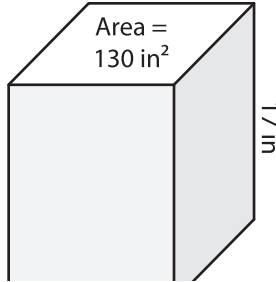
Find the volume of each rectangular prism.

1)

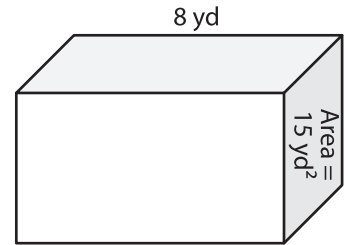


Volume = _____

2)

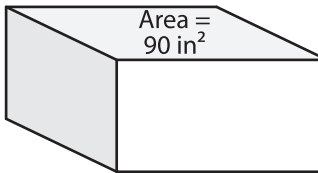


3)



Volume = _____

4)



Volume = _____

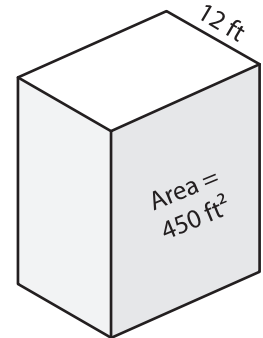
PREVIEW

Gain complete access to the largest collection of worksheets in all subjects!

Members, please log in to download this worksheet.

Not a member? Please sign up to gain complete access.

www.mathworksheets4kids.com



Volume = _____

7) A rectangular prism has a

_____ yards. What is its volume?

8) Find the volume of the rectangular prism with a base area of 13 square feet and a height of 7 feet.
