

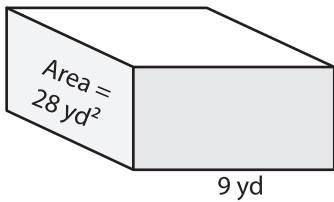
Name : \_\_\_\_\_

## Volume - Rectangular Prism

Integers: 52

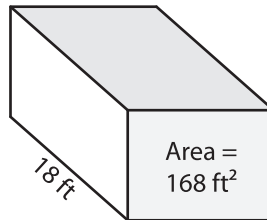
Find the volume of each rectangular prism.

1)

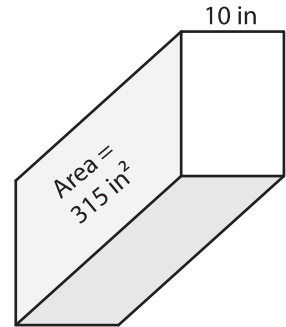


Volume = \_\_\_\_\_

2)

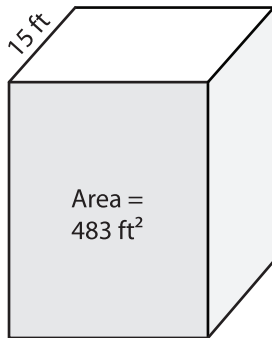


3)



Volume = \_\_\_\_\_

4)



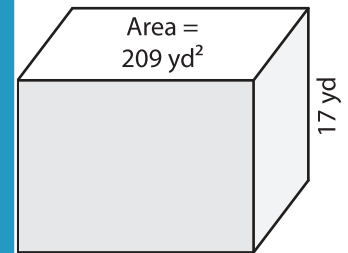
Volume = \_\_\_\_\_

**PREVIEW**  
Gain complete access to the largest  
collection of worksheets in all subjects!

Members, please  
log in to  
download this  
worksheet.

Not a member?  
Please sign up to  
gain complete  
access.

[www.mathworksheets4kids.com](http://www.mathworksheets4kids.com)



Volume = \_\_\_\_\_

7) The base area of a rectangular prism is 120 square yards. What is its volume if its length is 24 inches.

\_\_\_\_\_

8) The height of a rectangular prism is 13 yards. If the base area is 255 square yards, what is its volume?

\_\_\_\_\_