


Name : _____

Counting Cubes - Rectangular Prisms

ES3

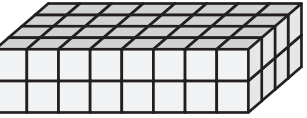

Count the unit cubes and find the volume of each rectangular prism.  = 1 yd³

1)




Volume = _____

2)



Volume = _____

4)



Volume = _____

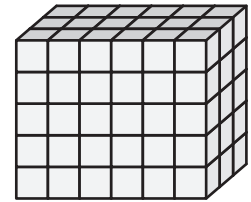
PREVIEW

Gain complete access to the largest collection of worksheets in all subjects!

Members, please log in to download this worksheet.


Not a member? Please sign up to gain complete access.

www.mathworksheets4kids.com




Volume = _____


7)



Volume = _____



Volume = _____



Volume = _____

Name : _____

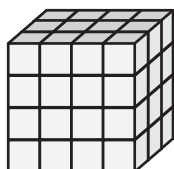
Answer key

Counting Cubes - Rectangular Prisms

ES3

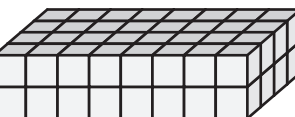

Count the unit cubes and find the volume of each rectangular prism.  = 1 yd³

1)




Volume = 48 yd³

2)



Volume = 64 yd³

4)



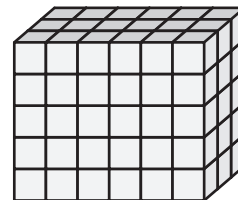
Volume = 80 yd³

Gain complete access to the largest collection of worksheets in all subjects!

Members, please log in to download this worksheet.


Not a member? Please sign up to gain complete access.

www.mathworksheets4kids.com




Volume = 90 yd³


7)



Volume = 96 yd³



Volume = 60 yd³



Volume = 42 yd³