

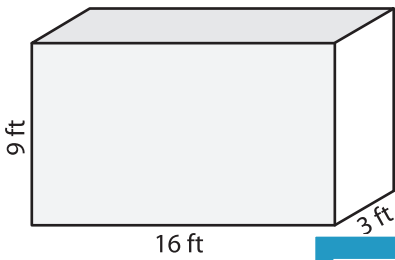
Name : _____

Volume - Rectangular Prism

ES1

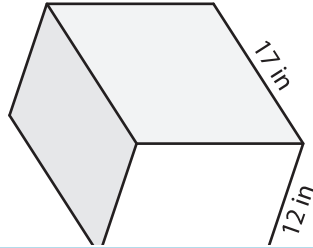
A) Find the volume of each rectangular prism.

1)



Volume = _____

2)



PREVIEW

Gain complete access to the largest collection of worksheets in all subjects!

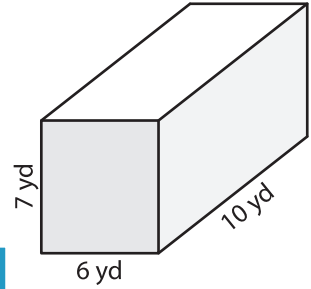
Members, please log in to download this worksheet.

Not a member? Please sign up to gain complete access.

www.mathworksheets4kids.com

Volume = _____

3)



Volume = _____

B) Find the volume of each rectangular prism.

4) length = 19 in ; width = 11 ft ; height = 8 ft

Volume = _____

6) width = 3 yd ; height = 9 in ; length = 7 in

Volume = _____

Volume = _____

Volume = _____

8) A rectangular prism has a length of 12 feet, a width of 4 feet and a height of 8 feet. What is the volume of the prism?
