


Name : \_\_\_\_\_

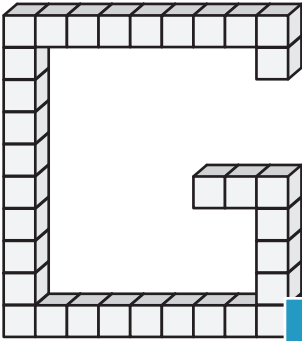
## Counting Cubes - Solid Blocks

ES3

Count the unit cubes and find the volume of each solid block.

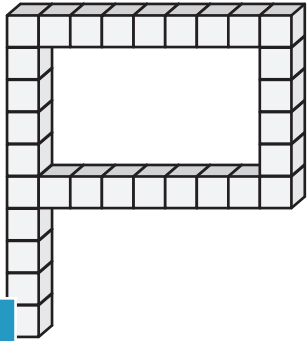
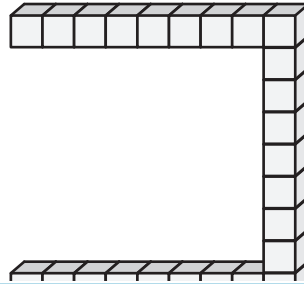
 = 1 ft<sup>3</sup>

1)



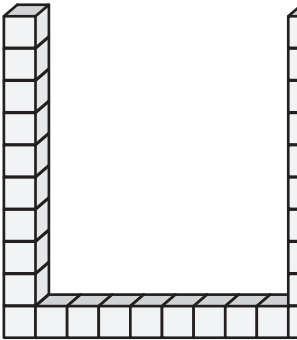
Volume = \_\_\_\_\_

2)



Volume = \_\_\_\_\_

4)



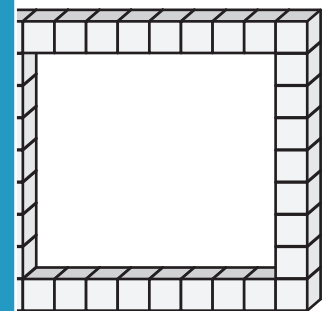
Volume = \_\_\_\_\_

Gain complete access to the largest  
collection of worksheets in all subjects!

Members, please  
log in to  
download this  
worksheet.

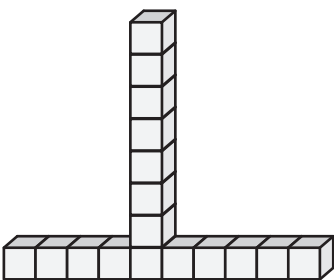
Not a member?  
Please sign up to  
gain complete  
access.

[www.mathworksheets4kids.com](http://www.mathworksheets4kids.com)

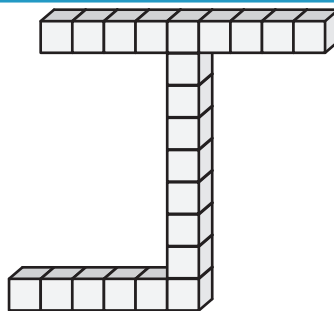


Volume = \_\_\_\_\_


7)



Volume = \_\_\_\_\_



Volume = \_\_\_\_\_



Volume = \_\_\_\_\_