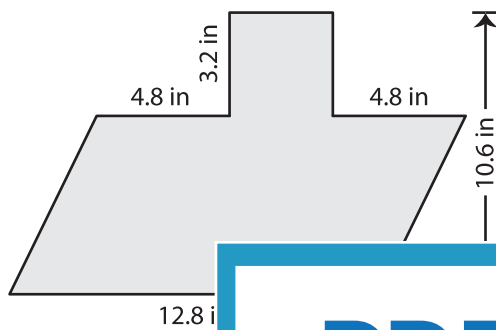


Name : \_\_\_\_\_

## Area - Compound Shapes

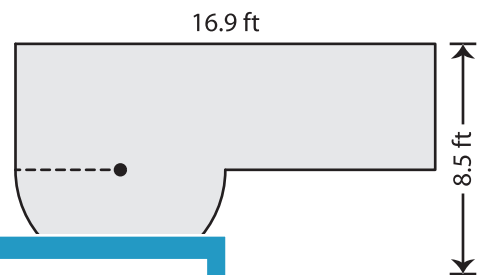
Find the area of each figure. Round your answer to 2 decimal places if required.  
(Use  $\pi = 3.14$ )

1)

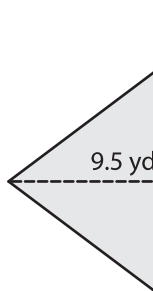


Area = \_\_\_\_\_

2)



3)



Area = \_\_\_\_\_

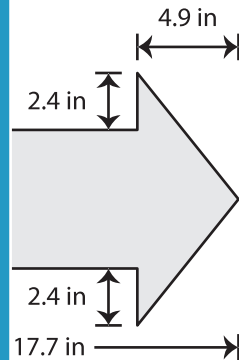
**PREVIEW**

Gain complete access to the largest collection of worksheets in all subjects!

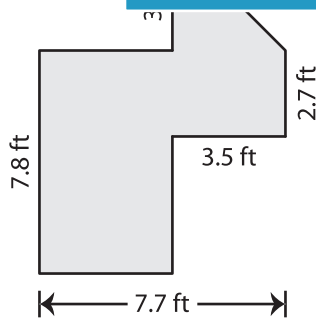
Members, please log in to download this worksheet.

Not a member? Please sign up to gain complete access.

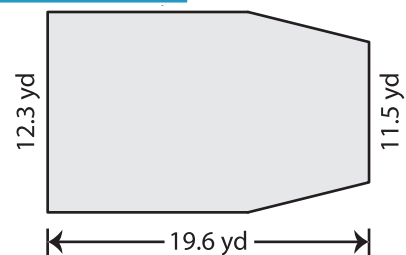
[www.mathworksheets4kids.com](http://www.mathworksheets4kids.com)



5)



Area = \_\_\_\_\_



Area = \_\_\_\_\_