

Name : _____

Area of a Kite

Sheet 3

A) Find the length of the unknown diagonal of each kite for the given measurements.

1) Area = 96 in^2 , diagonal 1 = 24 in

diagonal 2 = _____

2) Area = 800 ft^2 , diagonal 2 = 50 ft

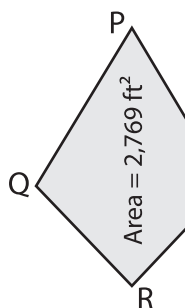
diagonal 1 = _____

3) Area = 621 yd^2 , diagonal 2 = 30 yd

diagonal 1 = _____

4) Area = 9 yd^2 , diagonal 1 = 6 yd

5)



PR = 78 ft. Find QS

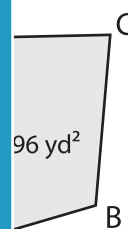
PREVIEW

Gain complete access to the largest collection of worksheets in all subjects!

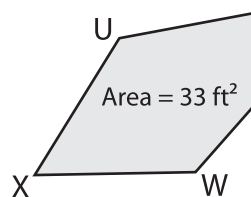
Members, please log in to download this worksheet.

Not a member? Please sign up to gain complete access.

www.mathworksheets4kids.com



7)



UW = 4 ft. Find VX.

LN = 68 in. Find KM.



9) The area of a kite is 306 square inches. If one of the diagonals measures 17 inches, determine the length of the other diagonal.
