

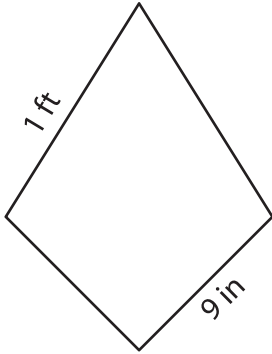
Name : _____

Perimeter of a Kite

Sheet 1

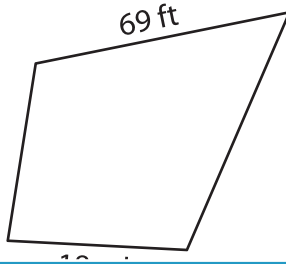
Find the perimeter of each kite.

1)

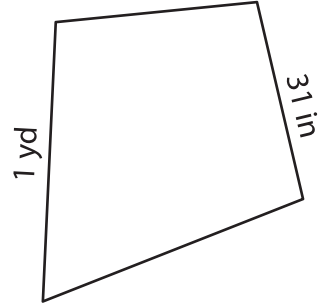


Perimeter = _____

2)

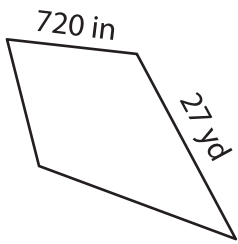


3)



Perimeter = _____ in

4)



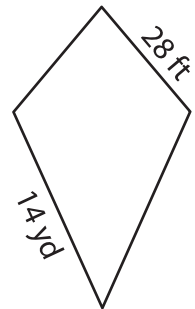
Perimeter = _____

PREVIEW
Gain complete access to the largest collection of worksheets in all subjects!

Members, please log in to download this worksheet.

Not a member? Please sign up to gain complete access.

www.mathworksheets4kids.com



Perimeter = _____ ft

7) The side lengths of a kite

are 12 feet and 10 yards. Find the perimeter of the kite.

_____ feet

8) If the non-congruent sides of a kite measure 24 feet and 10 yards, what is the perimeter of the kite?

_____ yards