

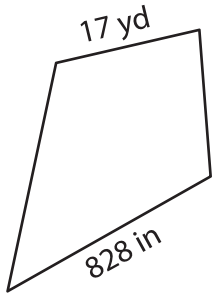
Name : _____

Perimeter of a Kite

Sheet 2

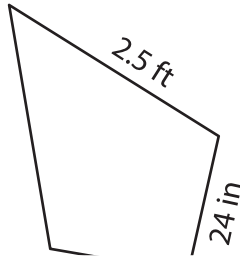
Find the perimeter of each kite.

1)

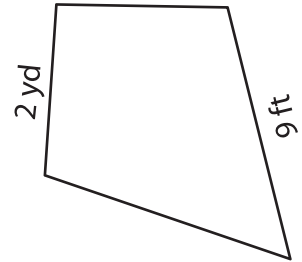


Perimeter = _____

2)

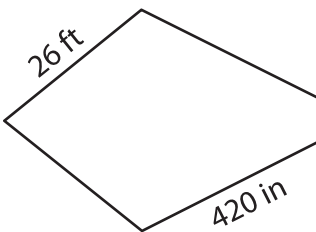


3)



Perimeter = _____ ft

4)



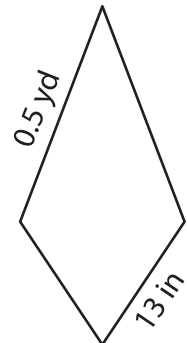
Perimeter = _____

PREVIEW
Gain complete access to the largest collection of worksheets in all subjects!

Members, please log in to download this worksheet.

Not a member? Please sign up to gain complete access.

www.mathworksheets4kids.com



Perimeter = _____ in

7) If the lengths of the sides are _____

_____?

_____ yards

8) One of the sides of a kite measures 34 inches. If the other side of the kite measures 0.5 yards, determine its perimeter.

_____ inches