

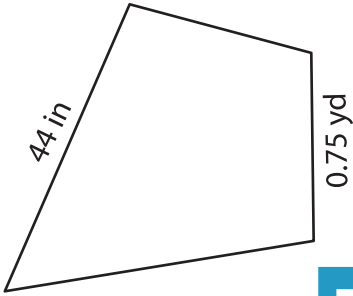
Name : _____

Perimeter of a Kite

Sheet 3

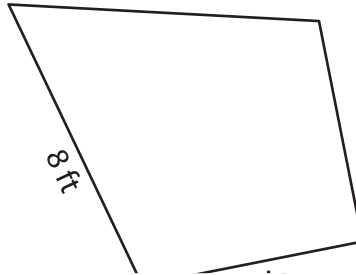
Find the perimeter of each kite.

1)

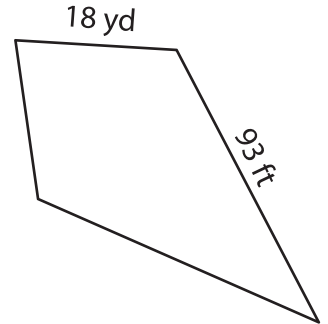


Perimeter = _____

2)

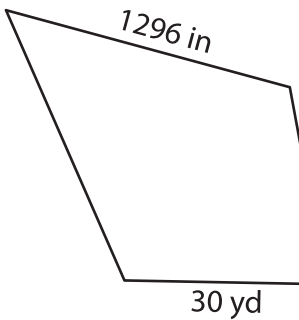


3)



Perimeter = _____ yd

4)



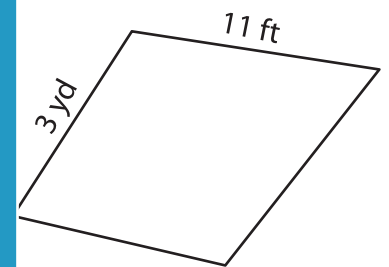
Perimeter = _____

PREVIEW
Gain complete access to the largest collection of worksheets in all subjects!

Members, please log in to download this worksheet.

Not a member? Please sign up to gain complete access.

www.mathworksheets4kids.com



Perimeter = _____ ft

7) Determine the perimeter

and 2.5 feet.

_____ inches

8) If the lengths of the sides of a kite are 10 feet and 4 yards, find its perimeter.

_____ feet