

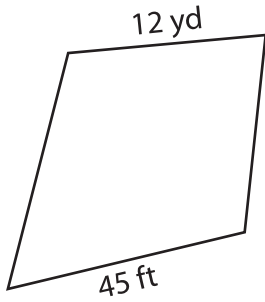
Name : _____

Perimeter of a Kite

Sheet 5


Find the perimeter of each kite.

1)

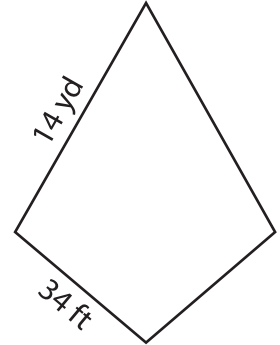


Perimeter = _____

2)

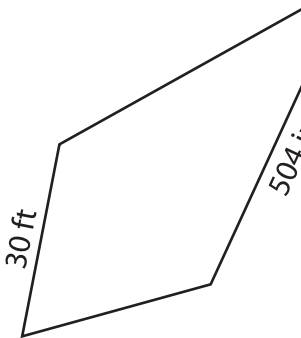


3)



Perimeter = _____ ft

4)



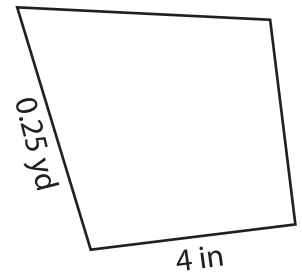
Perimeter = _____

PREVIEW
Gain complete access to the largest collection of worksheets in all subjects!

Members, please log in to download this worksheet.

Not a member? Please sign up to gain complete access.

www.mathworksheets4kids.com



Perimeter = _____ in

7) The side lengths of a kite are _____

_____ feet

8) If the lengths of the sides of a kite are 34 inches and 3 yards, what is its perimeter?

_____ inches